

Name: \_\_\_\_\_

Assessment Date: \_\_\_\_\_

Study Guide Due Date: \_\_\_\_\_

**Unit 2 - Multiplication and Geometry  
Review and Study Guide**

1.)

a.) Draw all of the arrays for 18

b.) List all the factors of 18. \_\_\_\_\_

2.)

List the first 10 multiples of 7

\_\_\_\_\_, \_\_\_\_\_, \_\_\_\_\_, \_\_\_\_\_, \_\_\_\_\_, \_\_\_\_\_, \_\_\_\_\_, \_\_\_\_\_, \_\_\_\_\_,

\_\_\_\_\_

3.)

Find the area of the rectangle.

**Length:** \_\_\_\_\_ cm

**Width:** \_\_\_\_\_ cm



**Area:** \_\_\_\_\_ square centimeters

Explain how you found the area.

---

---

---

---

4.)

Find the number of minutes.

Hours	Minutes
1	
5	
7	
9	

Explain how you found how many minutes are in 9 hours.

---

---

---

---

5.)

Should you add or multiply to find the answer to the question below. Explain.

Judith collected 9 marbles.  
Swen has 6 times as many marbles.  
How many marbles does Swen have?

---

---

---


---

---

---


6.)

Circle any right angles or write none.



7.)

Name 2 properties of the quadrilateral.



---


---

---

---

8.)

Draw a least one line of symmetry in the shape.



9.)

Solve this “What’s My Rule?” table.

In	Out
<b>3</b>	
	<b>35</b>
<b>6</b>	
<b>12</b>	