

1 Solve.

- a.  $5 * 7 =$  \_\_\_\_\_
- b.  $2 *$  \_\_\_\_\_  $= 12$
- c. \_\_\_\_\_  $* 7 = 49$
- d.  $9 *$  \_\_\_\_\_  $= 45$
- e.  $8 * 4 =$  \_\_\_\_\_

2 Draw  $\angle MRT$ .



What is another name for  $\angle MRT$ ?

\_\_\_\_\_

 SRB  
228

3 Write  $>$ ,  $<$ , or  $=$  to make each number sentence true.

- a.  $46,609$  \_\_\_\_\_  $45,699$
- b.  $67,749$  \_\_\_\_\_  $66,749$
- c.  $2$  thousand \_\_\_\_\_  $2,000$
- d.  $108,755$  \_\_\_\_\_  $1$  million
- e.  $1,000,000$  \_\_\_\_\_  $858,192$

 SRB  
81

4 Use U.S. traditional subtraction.

$$\begin{array}{r} 1,247 \\ - 156 \\ \hline \end{array}$$

$$\begin{array}{r} 3,531 \\ - 2,246 \\ \hline \end{array}$$

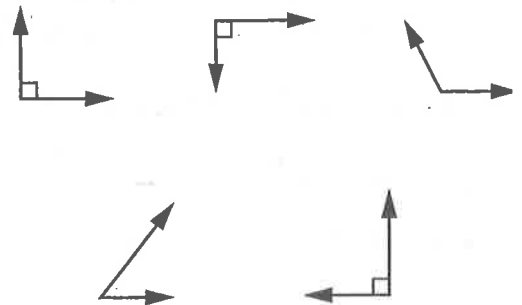
 SRB  
100-101

5 Keanu has 10 feet of model train track. His sister has 14 feet, and his brother has 6 feet. How many inches of track do they have all together?

Answer: \_\_\_\_\_ inches

 SRB  
186-187

6 Circle the right angles.


 SRB  
229

- 1 a. The dresser is 3 feet tall. What is the height in inches?

\_\_\_\_\_ inches

- b. The sidewalk is 15 yards long. What is the length in feet?

\_\_\_\_\_ feet



- 2 Regulation football fields are rectangles that measure 360 feet long and 160 feet wide. If Jamie walks the perimeter of the football field, about how far will she go?

Number model:

\_\_\_\_\_

\_\_\_\_\_

Answer: \_\_\_\_\_ feet



- 3 Fill in the missing digits.

5,	3	8	
+ 2,		7	7
7,	8	6	3



- 4 Draw lines to match each word to the correct pair or pairs of line segments.

perpendicular



parallel



intersecting



- 5 **Writing/Reasoning** How did you find the missing digits in Problem 3?

\_\_\_\_\_

\_\_\_\_\_

\_\_\_\_\_

\_\_\_\_\_

\_\_\_\_\_

\_\_\_\_\_



1 Multiply mentally.

a.  $5 * 8 =$  \_\_\_\_\_

b.  $2 *$  \_\_\_\_\_  $= 16$

c. \_\_\_\_\_  $* 7 = 21$

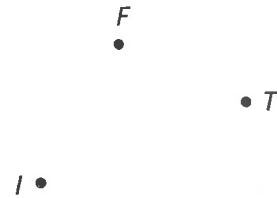
d.  $9 *$  \_\_\_\_\_  $= 81$

e.  $8 * 3 =$  \_\_\_\_\_

 SRB  
228

2 Draw  $\angle TIF$ . What is the vertex of  $\angle TIF$ ?

Point \_\_\_\_\_



3 Which number sentence is NOT true? Choose the best answer.

(A)  $5,389 > 3,389$

(B)  $70,642 < 70,699$

(C)  $1 \text{ million} = 1,000,000$

(D)  $800,032 = 8 \text{ hundred } 32 \text{ thousand}$

(E)  $400 + 30 + 5 < 4,000 + 30 + 5$

 SRB  
81

4 Subtract using U.S. traditional subtraction.

a. 
$$\begin{array}{r} 2,231 \\ - 1,084 \\ \hline \end{array}$$

b. 
$$\begin{array}{r} 5,603 \\ - 3,466 \\ \hline \end{array}$$

 SRB  
100-101

5 Chloe is replacing 3 different sections of the fence in her backyard. She needs fencing in lengths of 13 yards, 17 yards, and 20 yards. How much fencing does she need in feet?

Answer: \_\_\_\_\_ feet

 SRB  
186-187

6 Use a straightedge to draw a right angle.

 SRB  
229

1 Convert the following measures.

- a. 18 yards = \_\_\_\_\_ feet
- b. 10 feet = \_\_\_\_\_ inches
- c. 25 yards = \_\_\_\_\_ feet
- d. 5 yards 2 feet = \_\_\_\_\_ feet



2 Ari's backyard contains about an acre of lawn shaped in a rectangle. The rectangle measures 660 feet long by 66 feet wide. If Ari measures the distance around the edge, about how many feet is it?

Number model:

---



---

Answer: \_\_\_\_\_ feet



3 Fill in the missing digits.

3,	5	9	
+ 7,		0	5
11,	1	0	1



4 a. Draw a pair of parallel line segments.

b. Draw a pair of perpendicular line segments.



5 **Writing/Reasoning** Justin's incorrect answer to Problem 2 was 726 feet. Explain what he might have done to get that answer.

---



---



---



**1** Complete.

a. Name all the factors of 12.

\_\_\_\_\_, \_\_\_\_\_, \_\_\_\_\_,  
 \_\_\_\_\_, \_\_\_\_\_, \_\_\_\_\_

b. Name the factor pairs of 15.

\_\_\_\_\_ and \_\_\_\_\_  
 \_\_\_\_\_ and \_\_\_\_\_

SRB  
53

**2** To find the area of a rectangle, use the formula:

$$A = l * w$$

What is the area of a rectangle with a width of 6 inches and a length of 12 inches?

Equation: \_\_\_\_\_

Area: \_\_\_\_\_ square inches

SRB  
204

**3** Round 849,897 to the nearest thousand. Fill in the circle next to the correct answer.

(A) 840,000

(B) 900,000

(C) 850,000

(D) 800,000

SRB  
85-87

**4** a. Name 3 multiples of 7.

\_\_\_\_\_

b. Name 3 multiples of 6.

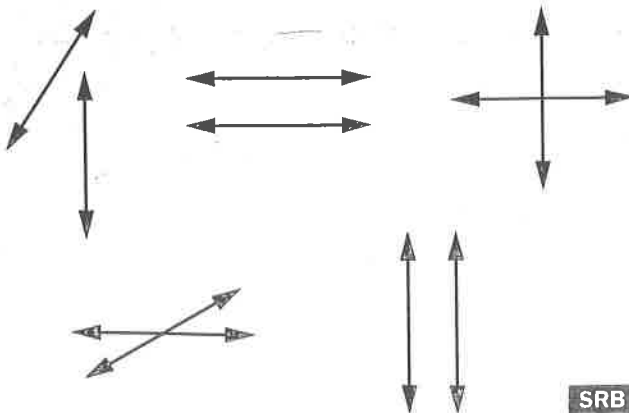
\_\_\_\_\_

c. Name 3 multiples of 8.

\_\_\_\_\_

SRB  
55

**5** Circle the parallel lines.




SRB  
230

**6** Mimi lives down the street from her friends Lisa and Ellen. It is 24 yards from Mimi's house to Lisa's house and 37 more yards from Lisa's house to Ellen's house. How far is it from Mimi's house to Ellen's house in feet?

Answer: \_\_\_\_\_ feet

SRB  
186-187

- 1 Find the area and perimeter of the rectangle.



Area = \_\_\_\_\_ square inches

Perimeter = \_\_\_\_\_ inches

 SRB  
200,  
204

 SRB  
230

- 3 Dan has two dogs, Jango and Riley, and a cat, Kisa. Every year, Jango eats 1,793 dog treats, Riley eats 2,094 treats, and Kisa eats 1,014 cat treats.

Estimate how many more treats both dogs eat than the cat.


Estimate:

\_\_\_\_\_

 SRB  
82-84

 SRB  
54

- 2 Circle the sets of lines that appear to be perpendicular to each other.



- 4 a. Name 8 prime numbers under 20.

\_\_\_\_\_

- b. Name 10 composite numbers under 20.

\_\_\_\_\_

\_\_\_\_\_

- 5 **Writing/Reasoning** How do you know the numbers in Problem 4a are prime?

 SRB  
54