


The Greenhouse Effect **Germany's Heinkel He 111 Medium Bomber**




- What was unique about the nose of this bomber?
- How many men flew in this plane?
- What part of the plane gave it its nickname "the Spade"?
- Which had a greater range, the He 111 or the American B-25 Mitchell?

Thunder Rolling **America's GMC 2.5-ton 6 X 6 Truck**




- What was the nickname of this truck?
- How far could this truck travel?
- Did the German Opel Blitz have the same number of wheels?

Snubnosed Unit Shifter **America's Higgins Boat**



- What does LCVP stand for?
- Who designed this boat?
- T / F The hull of the Higgins Boat was made of wood.
- How many men could fit on this boat?


Cheap, Tough, Good Enough **The Soviet PPSH-41 Submachine Gun**



- Who designed this gun/
- T / F This gun could fire German rounds.
- Which could fire more rounds the American Thompson or the PPSH-41?

Teeny Terror **Germany's Type 127 Seehund midget submarine**

- What does Seehund mean?
Why couldn't the periscope be lowered?
- How many torpedoes did it carry?
- What was the Japanese similar submarine?



Use *The Geographical Picture*, to answer the following question.

1. Which country had the highest percentage killed?

2. Which country had the least number killed?

3. Which country had the oldest Jewish community?

4. Name the countries that lost more than half of their Jewish population.

5. Which country had the youngest Jewish community?

6. How many Jews survived from the Soviet Union?

7. Which countries lost between 110,000 and 70,000 Jews?

Use *Fact Sheet - World War II*, to answer the following questions.

1. What country had the highest military at Peak Strength?

2. How much would an officer make for one year?

3. How much did the *Axis Powers* spend on the war? (Total)

4. How many battle and civilian deaths were there in W.W.II? (total)

5. What year did the US Navy personnel go over 1 million?

6. How Long was the duration of the average serviceman?

7. Which Branch of service (Army, Navy, Marines) had the fewest wounded?